



Determine how many groups of 100 can be created from the blocks shown.

Answers

Ex)

Ex. 2

1)

1. \_\_\_\_\_

2)

2. \_\_\_\_\_

3)

3. \_\_\_\_\_

4)

4. \_\_\_\_\_

5)

5. \_\_\_\_\_

6)

6. \_\_\_\_\_

7)

7. \_\_\_\_\_

8)

8. \_\_\_\_\_

9)

9. \_\_\_\_\_

\_\_\_\_\_

\_\_\_\_\_

\_\_\_\_\_

\_\_\_\_\_

\_\_\_\_\_

\_\_\_\_\_

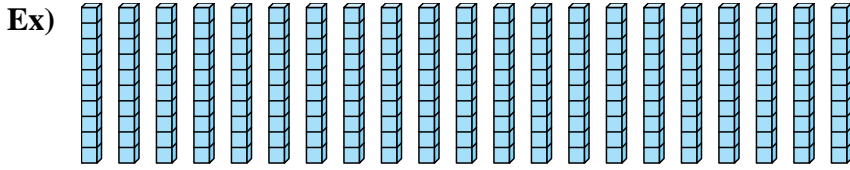
\_\_\_\_\_

\_\_\_\_\_

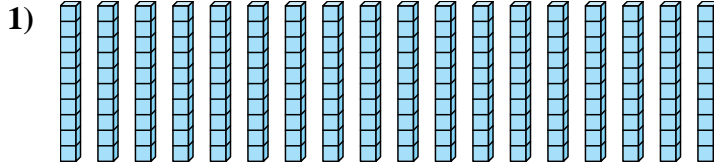


Determine how many groups of 100 can be created from the blocks shown.

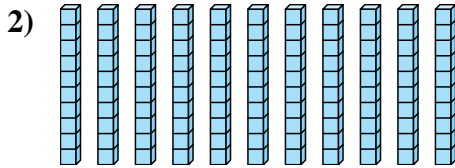
Answers



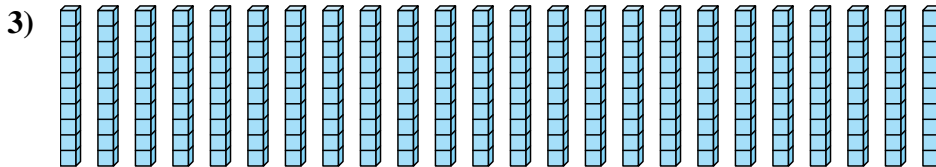
Ex. 2



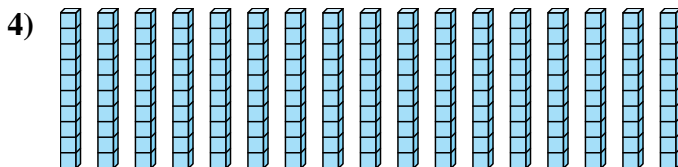
1. 1



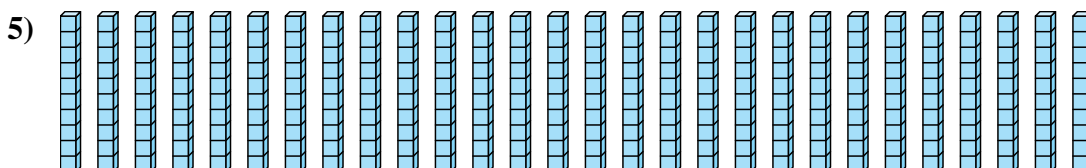
2. 1




3. 2




4. 1



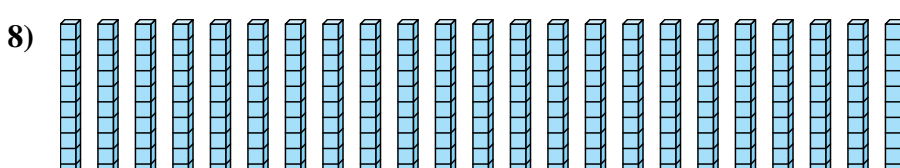
5. 2



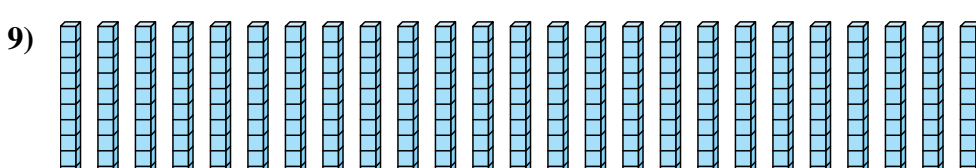
6. 1



7. 1



8. 2



9. 2